


Name _____

Date _____


Multiplication Practice

Write a number sentence for each array.

1.




2.



3.




4.



5.




6.




7.



8.



9.




10.



11.



12.



Name _____

Date _____

Multiplication Practice

Write a number sentence for each array.

