

Name : _____

Division Sentence - Arrays

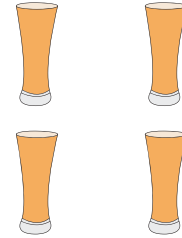
Sheet 1

Write a division sentence to describe each array.


1)




2)




3)



4)




5)



6)



7)



8)

