

Name _____

Date _____



READING SCALES 3A

Use your knowledge of the number system to read these scales which are going up ones, fives and tens.

1) How long is the line? _____ mm



2) How long is the line? _____ mm



3) How many ml? _____



4) How many ml? _____



5) How many ml? _____



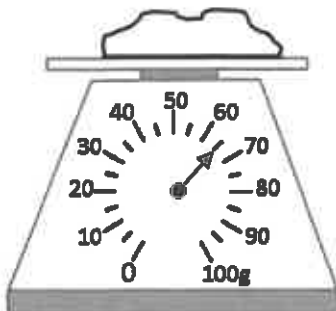
6) How long is the line? _____ cm



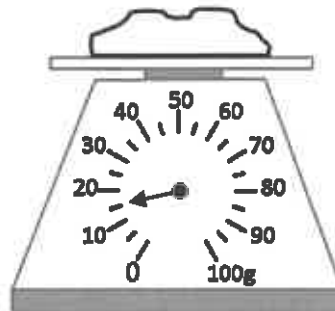
7) How long is the line? _____ cm



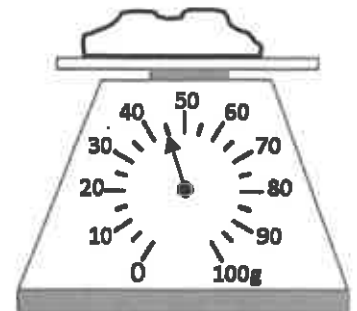
8) How many g? _____



9) How many g? _____



10) How many g? _____



Name _____

Date _____



READING SCALES 3B

Use your knowledge of the number system to read these scales which are going up ones, fives and tens.

1) How long is the line? _____ mm



2) How long is the line? _____ mm



3) How many ml? _____



4) How many ml? _____



5) How many ml? _____



6) How long is the line? _____ cm



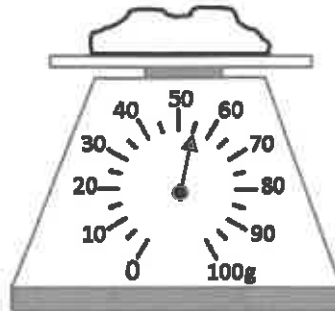
7) How long is the line? _____ cm



8) How many g? _____



9) How many g? _____



10) How many g? _____

